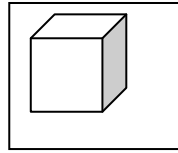
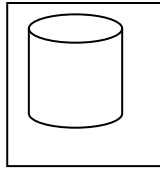
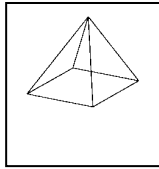
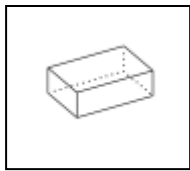
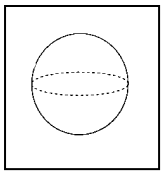


Les solides

1. Relie chaque solide à son nom



Cylindre

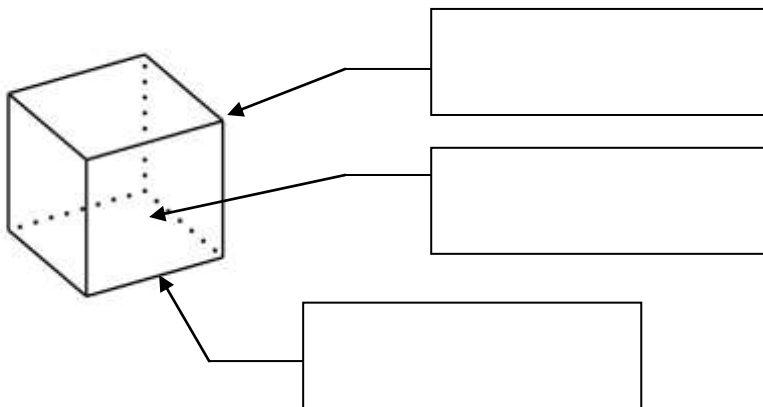
Cube

Pavé

Sphère

Pyramide

2. Ecris les noms indiqués par les flèches : **sommet** – **arête** - **face**



3. Entoure les figures qui sont des solides

